







ちがいはいくつ


左と右の動物の数は何匹違いますか。
その数だけ四角の中に赤色で丸をつけましょう。



--	--	--	--	--	--	--	--	--	--



--	--	--	--	--	--	--	--	--	--



--	--	--	--	--	--	--	--	--	--

