





ちがいはいくつ



左と右の恐竜の数は何頭違いますか。
その数だけ四角の中に青色で丸をつけましょう。



--	--	--	--	--	--	--	--	--	--



--	--	--	--	--	--	--	--	--	--



--	--	--	--	--	--	--	--	--	--

