





あわせていくつ



左と右の動物は合わせて何匹ですか。四角の中に赤色で丸をつけましょう。



--	--	--	--	--	--	--	--	--	--



--	--	--	--	--	--	--	--	--	--



--	--	--	--	--	--	--	--	--	--

