




あわせていくつ



左と右の果物は合わせて何個ですか。四角の中に青色で丸をつけましょう。



--	--	--	--	--	--	--	--	--	--



--	--	--	--	--	--	--	--	--	--



--	--	--	--	--	--	--	--	--	--

