





# あわせていくつ


左と右の生き物は合わせて何匹ですか。四角の中に青色で丸をつけましょう。



--	--	--	--	--	--	--	--	--	--



--	--	--	--	--	--	--	--	--	--



--	--	--	--	--	--	--	--	--	--

