





あわせていくつ


左と右の恐竜は合わせて何頭ですか。四角の中に青色で丸をつけましょう。



--	--	--	--	--	--	--	--	--	--



--	--	--	--	--	--	--	--	--	--



--	--	--	--	--	--	--	--	--	--

